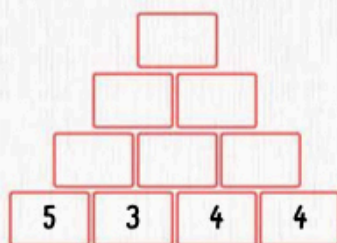
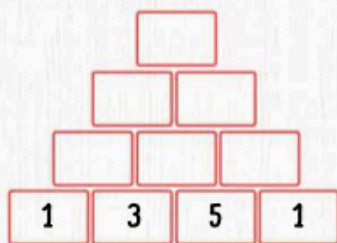

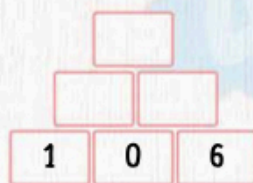
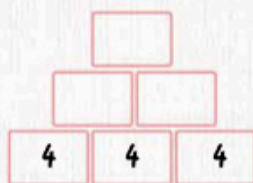
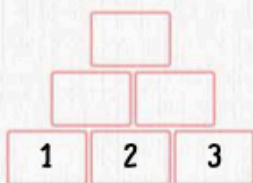



Pyramid Schemes

Add the two numbers next to each other and write the answers in the blocks above them. The first one has been done for you



Prism Madness

Can you count how many triangles are in the picture?
Circle the correct answer

- 9 10 13

